

TeeJay Publishers Mental Mathematics Support Sheets



TeeJay Book 1b

Support Sheet for Test 2.

- Write each of these using digits (numbers) :-
 - nine thousand and fifty eight
 - six thousand one hundred and seven
 - three thousand and ninety.
- Round each of these numbers to the nearest ten :-
 - 176
 - 894
 - 775.
- Find :-
 - three times eight
 - three times seven
 - eleven times three.
- Write each of these numbers in words :-
 - 4322
 - 5031
 - 1001.
- Find three hundred take away thirty five.
 - What is five hundred subtract one hundred and fifty ?
 - Subtract eighty from six hundred and ninety.
- Find :-
 - half of eighty
 - half of sixty
 - half of forty four.
- Write how much money each person has, using the decimal point :-
 - Al - Seven £1 coins, two 20p's and a 5p
 - Gio - Four £2 coins, six 10p's and seven 1p's
 - Ann - Six £2 coins, three £1's, two 50p's, nine 10p's, three 2p's.
- What will be the remainder for each of these calculations :-
 - seventeen ÷ two
 - nineteen ÷ three
 - twenty seven ÷ three ?
- Find :-
 - $39 + 11$
 - twelve + forty eight
 - $21 + 69$.
- How many 10p coins can I get for :-
 - £2.40
 - £3.80
 - £5.20 ?

TeeJay Publishers Mental Mathematics Support Sheets



TeeJay Book 1b

Support Sheet for Test 3.

1. Write each time in a different way :-

- a eight fifteen b seven twenty c nine fifty.

2. Write the month that is :-

- a 3 months before August b 4 months after May c 2 months before March.

3. Find :-

- a six times five b seven times five c eight multiplied by 5.

4. Write each of these times in 24 hour notation :-

- a 8:30 am b 7:45 pm c 11:20 pm.

5. a I double a number and get 32. What is the number ?

b When I double a number I get 28. What number was doubled ? ✓

c Double a number gives 42. What number ?

6. How long is it from :-

- a 3:30 pm to 10:30 pm b 1:15 am to 6:15 am c 8:40 pm to 11:40 pm ?

7. Find :-

- a fifteen \div three b thirty six \div three c twenty four \div three.

8. Write each of these as 12 hour clock times :-

- a 1610 b 2010 c 0915.


9. Find :-

- a four times nine b three times nine c five times six.

10. a Take six from fifty. b Find fifty five subtract seven.

c Take eleven from forty.

TeeJay Publishers Mental Mathematics Support Sheets




TeeJay Book 1b

Support Sheet for Test 4.

- Write each of these as 24 hour clock times :-
 - 4:20 am
 - 7:10 pm
 - 10:05 pm.
- Find sixty two - six.
 - Take eight from eighty.
 - What is $45 - 9$?
- Find $36 \div 2$.
 - Divide 27 by 3.
 - Divide two into fifty.
- Find :-
 - double twelve
 - double sixteen
 - double nineteen.
- Yaz gets £3.20 change from her £10 note. How much did she spend ?
 - Keri spends £4.80 from her £10 note. How much change will she get ?
 - Pia gets £7.25 change from her £10 note. How much did she spend ?
- Write each of these numbers using words :-
 - 7040
 - 1307
 - 8753.
- Round each of these numbers to the nearest ten :-
 - six hundred and fifty four
 - eight hundred and fifteen
 - nine hundred and eighty five.
- Find :-
 - sixty seven + nine
 - eight + eighty nine
 - eleven + forty five.
- Which month comes just :-
 - after July
 - before December
 - before October ?
- Write each time in a different way :-
 - eight ten
 - four fifty
 - six forty five.

TeeJay Publishers Mental Mathematics Support Sheets



TeeJay Book 1b

Support Sheet for Test 5.

1. Find :-

a $35 \div 5$

b twenty five \div five

c forty divided by five.

2. I turn 90° anticlockwise. What direction would I face if I started by facing :-

a East

b West

c South ?

3. How long is it from :-

a noon to half past three

b four thirty to half past eight

c quarter past nine to quarter to eleven ?

4. How much in total is each of these :-

a fifteen 10p coins and three 5p coins

b three 20p coins, four 10p coins and two 2p coins

c twenty six 10p coins, five 5p coins and one 2p coin ?

5. Find :-

a a half of £40

b a third of £60

c a half of £36.

6. What will be the remainder for each of these :-

a twenty six \div four

b thirty one \div four

c forty nine \div four ?

7. a Add fifty three to six. b Add sixty four to nine. c Add eleven to sixty nine.

8. Write each of the following using digits (numbers) :-

a six thousand four hundred and seventeen

b eight thousand and seventy

c seven thousand three hundred and nine.

9. Find :-

a nine times three

b eight times four

c seven multiplied by five.

10. Round each of these to the nearest ten :-

a 876

b 597

c 949.

TeeJay Publishers Mental Mathematics Support Sheets



TeeJay Book 1b

Support Sheet for Test 6.

- a Subtract eight from 76. b Take nine from sixty. c What is $65 - 8$?
- a Find 4×11 . b Multiply four and eight. c What are four nines ?
- a I spend three pounds and forty five pence from a £5 note. How much is my change ?
b I get four pounds and five pence change from a £5 note. How much did I spend ?
c I have £5. I spend 85p. How much change will I get ?
- a What is three hundred and fifty divided by ten ?
b What is one hundred and ninety divided by ten ?
c Divide six hundred by ten.
- Write each time using 24 hour notation :-
a 20 to 10 at night b ten to eight at night c half past 9 in the morning.
- Which month is :-
a 3 months before April b 2 months before June c 3 months before February ?
- What is the remainder for each of these calculations :-
a forty nine \div five b seventy three \div five c thirty seven \div five ?
- What direction will I face if I turn 90° clockwise from :-
a North b South c East ?
- a Find $147 + 12$. b Add 165 and 15. c What is $127 + 13$?
- Giving your answer in hours and minutes, how long is it from :-
a quarter to ten in the morning till noon
b half past eight at night till midnight
c quarter to six in the morning till eight o'clock in the morning ?

TeeJay Publishers Mental Mathematics Support Sheets



TeeJay Book 1b

Support Sheet for Test 7.

- Find :-
 - five eights
 - seven times five
 - six multiplied by five.
- How many 20p pieces can I get for a :-
 - £2 coin
 - £10 note
 - £20 note ?
- How many days altogether are there in :-
 - May and June
 - April and May
 - April and November ?
- Write each of these dates in 6 digit format :-
 - 30th May 2018
 - 1st January 2020
 - 11th November 2011.
- How much will it cost for one of each of the following items :-
 - three sweets cost 60p
 - four cakes cost £12
 - five toys cost £45 ?
- Donna is half her mother's age. Donna is thirty. How old is her mum ?
 - Alex is a third of his dad's age. Alex is fifteen. How old is his dad ?
 - Dawn is half as old as her brother Tom. Dawn is eight. How old is Tom ?
- Add each amount and write each answer using a decimal point :-
 - £2.50 and £1.30
 - £3.45 and 55p
 - £2.65 and £4.15.
- Round each number to the nearest ten :-
 - 762
 - 359
 - 696.
- What number take away nine gives thirty three ?
 - I take seven from a number to get forty seven. What is the number ?
 - I get the answer 66 when I subtract eight from a number. What number ?
- Write each of these using digits (numbers) :-
 - five thousand and sixty
 - nine thousand and four
 - seven thousand and eighty three.

TeeJay Publishers Mental Mathematics Support Sheets



TeeJay Book 1b

Support Sheet for Test 8.

- Write each of these numbers using words :-
 - 6070
 - 8301
 - 9005.
- Jen gave half of her sixteen pounds to Ann. How much did she give to Ann?
 - Vi gave a third of her thirty six pence to Di. How much did she give to Di?
 - Jo was given half of Ron's fourteen pounds. How much was Jo given?
- Find 135 plus 45.
 - Add 25 and 175.
 - What is $176 + 14$?
- Find :-
 - 55 divided by 5
 - thirty five \div five
 - five into sixty.
- How many hours is it from :-
 - 10:15 am to 1:15 pm
 - 12:40 pm to 4:40 pm
 - 1:45 am to 11:45 am?
- Find $\underline{3} \overline{)153}$.
 - Divide 123 by 3.
 - Divide 3 into 180.
- How much is each of the following in total :- (Use a decimal point).
 - four $\pounds 1$ coins and four 50p coins
 - three $\pounds 2$ coins and five 20p coins
 - two $\pounds 1$ coins, two 50p coins and one 20p, 10p, 5p and 1p coin?
- Find :-
 - $\pounds 3.65$ and 85p
 - $\pounds 2.25$ and $\pounds 1.85$
 - $\pounds 4.35$ and $\pounds 3.65$.
- Which season comes :-
 - just after Summer
 - just before Winter
 - just before Spring?
- Write each of these dates fully in words :-
 - 20/06/10
 - 05/10/07
 - 11/09/22.




TeeJay Publishers Mental Mathematics Support Sheets



TeeJay Book 1b

Support Sheet for Test 9.

- a Find 6×9 . b Multiply five and nine. c What is 7 times 7 ?
- How many of these shapes would make good tiles ?

a  b  c 
- Write down the remainder for each of these calculations :-

a Divide forty nine by 5. b Find thirty one \div five. c Divide 5 into sixty five.
- Write each of these as 12 hour clock times :- (*Remember am and pm*).

a 0530 b 1745 c 1210.
- a Find $290 - 55$. b Subtract 35 from 660. c Take 75 from 890.
- Round each of these to the nearest ten pounds :-

a £755 b £804 c £169.
- a Take £1.25 from £3.70. b Find £8.60 - £5.40. c From £6.70, take £3.55.
- How many days are there altogether in the months of :-

a January and March b October and December c July and September ?
- a A DVD costs eight pounds. How much will seven DVDs cost ?
b A cake costs nine pounds. How much will it cost for six cakes ?
c A comic costs seven pounds. How much will six comics cost ?
- Find :-

a $60 \div 3 \div 2$ b $90 \div 3 - 5$ c $100 - 4 - 5$.

TeeJay Publishers Mental Mathematics Support Sheets




TeeJay Book 1b

Support Sheet for Test 10.

- Find :-
 - six + five + four
 - $8 + 7 + 6 + 5$
 - $1 + 2 + 3 + 4 + 5 + 6$.
- What is double fifteen, add ten, then halve your answer ?
 - Find :- double twelve, add eight, then half your answer.
 - Find :- double eight, add twelve then half your answer.
- How much will a weekly hire charge be if a daily hire is :-
 - £6
 - £7
 - ten pounds ?
- What is my arrival time for each of these leaving times and journey times :-
 - 6:10 am. Takes 7 hours
 - 7:45 pm. Takes 3 hours
 - 4:55 pm. Takes 4 hours ?
- Sixty four people are on a bus. Nine get off. How many people are left on the bus ?
 - There are fifty six people on a train. Eight get off. How many people are left ?
 - Seventy men are in a queue. 12 are served. How many men are still in the queue ?
- Write each of these numbers using digits (numbers) :-
 - six thousand, seven hundred and six
 - eight thousand and fifty
 - nine thousand, nine hundred and nine.
- How many are left over each time if these are shared equally :-
 - 41 shared among 5
 - 47 shared among 3
 - 38 shared among 5 ?
- How much change from a £5 note will each person get if they buy :-
 - 2 toys at £2 each
 - 3 sweets at 50p each
 - 4 papers at 40p each ?
- Write each date fully in words :-
 - 03/06/09
 - 11/10/09
 - 01/09/19.
- A packet holds five sweets. How many sweets are there in eight packets ?
 - A carton holds eleven teddies. How many teddies are there in seven cartons ?
 - A box holds eight toy cars. How many cars are there in four boxes ?

TeeJay Publishers Mental Mathematics Support Sheets




TeeJay Book 1b

Support Sheet for Test 11.

- Twenty six of the 160 train passengers got off. How many were left on the train ?
 - 42 of the one hundred and fifty bus passengers got off. How many were left ?
 - Eleven of the one hundred and ten train passengers got off. How many were left ?
- Round each of these numbers to the nearest ten :-
 - 765
 - 556
 - eight hundred and four.
- Write each of these in 12 hour time format :- (*remember am and pm*)
 - five to five (*morning*)
 - half past 1 (*afternoon*)
 - quarter to nine (*night*).
- Eight chocolates are in a box. How many are in five boxes ?
 - Nine sardines are in 1 can. How many sardines are there in 6 cans ?
 - Ten chairs are in each row. How many chairs are there in 13 rows ?
- What is the total value each time :-
 - two £5 notes, three £2 coins, two 50p coins and six 1p coins
 - three £5 notes, seven £1 coins, four 50p's, six 10p's and four 2p's
 - two £5 notes, two £2 coins, two 20p's, two 10p's, two 5p's, two 2p's and a 1p ?
- In a year, what is the :-
 - 2nd last month
 - fourth last month
 - tenth month ?
- Find nine + eighty six.
 - Find eleven + fifty nine.
 - Find six + ninety five.
- Forty four marbles are shared equally among four people. How many will each get ?
 - Thirty five sweets are shared equally among five children. How many will each get ?
 - Twenty eight cans are split equally among four boxes. How many will be in each box ?
- Jo has £1.75. Jack has 75p. How much do they have altogether ?
 - Ben has £2.70. Eli has 80p. How much do they have if they add their money together ?
 - Fern has £3.20. Fran has £1.90. How much do they have in total ?
- Eight fans are stored in a box. How many fans will be in five boxes ?
 - Seven apples are in a packet. How many apples will be in six packets ?
 - Nine toy soldiers are in a carton. How many soldiers will be in eight cartons ?

TeeJay Publishers Mental Mathematics Support Sheets




TeeJay Book 1b

Support Sheet for Test 12.

- Find 8 times 6.
 - What is 8 times 7?
 - Multiply eight and nine.
- Write each of these times in 24 hour form :-
 - quarter to nine at night
 - twenty to six in the evening
 - twenty five past three in the morning.
- Find :-
 - a third of 360
 - a half of 280
 - a third of 1800.
- When I divide a number by 2 the answer is 9 remainder 1. What is the number?
 - When I divide a number by 3 the answer is 11 remainder 2. What is the number?
 - The answer is 6 remainder 2 when I divide a number by 5. What number?
- Find nine times eight.
 - Multiply six and nine.
 - What are twelve nines?
- In what direction does each of these end up travelling :-
 - a jet flying South, makes a quarter turn clockwise then a half turn
 - a boat sailing West, makes a half turn, then a quarter turn anticlockwise
 - a plane flying East, makes a quarter turn anticlockwise then a half turn?
- How many days are there altogether in :-
 - May and June
 - October, November and December
 - August, July and September?
- Kat has £3.75 and Addy has £1.45. How much more does Kat have?
 - Dan has £4.50 and Dee has £2.40. How much less does Dee have?
 - Ian has £4.75 and Ina has £1.30. How much more does Ian have?
- Find $120 \div 4 + 3$.
 - What is $100 - 5 - 4$?
 - Calculate $80 \div 4 + 5$.
- Find $6 \times 8 + 7$.
 - What is $9 \times 5 - 7$?
 - Find $7 \times 5 + 12$.

TeeJay Publishers Mental Mathematics Support Sheets




TeeJay Book 1b

Support Sheet for Test 13.

- a Find $200 - 29$. b Subtract 59 from 100. c Take 18 from 100.
- a I get ten when I halve a number and take away one. What number ?
b I get eight when I halve a number and add three. What number ?
c When I halve a number and subtract five I get ten. What number did I start with ?
- Write the change I should get from a £10 note if I spend :-
a £7.85 b four pounds and ninety nine pence
c eight pounds and eighty four pence.
- How much will each person get if shared equally :-
a £64 among 8 people b £72 among 9 girls c £56 among 8 men ?
- Write the missing number in each of these :-
a 44, 52, 60, 68, ... b 81, 75, 69, 63, ... c 78, 69, 60, 51, ...
- Write each of these dates in 6 digit format :-
a tenth of April, 2024 b first of March, 2010 c fifteenth of May, 2030.
- a Find $660 + 250$. b Add 430 and 480. c What is $260 + 380$?
- a Find $5 \times 6 \times 10$. b What is $8 \times 7 \times 10$? c Multiply 6, 9 and 10.
- a How many minutes from ten to six until half past six ?
b How many minutes from twenty past nine until quarter to ten ?
c How many minutes from ten to five until quarter past five ?
- Find :-
a $72 \div 9 + 12$ b $72 \div 8 - 5$ c $75 \div 5 + 25$.

TeeJay Publishers Mental Mathematics Support Sheets



TeeJay Book 1b

Support Sheet for Test 14.

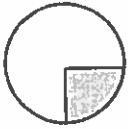
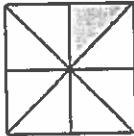




- Round each of these numbers to the nearest ten :-
 - 348
 - four hundred and twenty six
 - eight hundred and sixty five.
- Write :-
 - 1420 using am/pm
 - 0145 using am/pm
 - 1815 using am/pm.
- What will be the remainder for each of these calculations :-
 - fifty \div eight
 - seventy five \div seven
 - fifty seven \div three ?
- What is the total each time here :-
 - £4.46 and £1.24
 - £6.45 and £3 and 8p
 - £12.15 and 95p ?
- Write the next number in each of these patterns :-
 - 76, 69, 62, 55, ...
 - 33, 45, 57, 69, ...
 - 97, 89, 81, 73, ...
- Den weighs 67 kg. Al weighs 43 kg. How much heavier is Den ?
 - Nia weighs 84 kg. Hia weighs 68 kg. How much lighter is Hia ?
 - Mr White weighs 102 kg. Mrs White weighs 68 kg. How much heavier is Mr White ?
- Find :-
 - $180 \div 9 \div 4$
 - $360 \div 10 \div 6$
 - $200 \div 10 \div 5$.
- Find eight times seven, add eight.
 - What is nine times nine, subtract nine ?
 - What do I get if I multiply seven and six and then add twelve ?
- A toy is priced £5. How many toys have been sold in each of these total sales figures :-
 - £35 in 20 minutes
 - £70 in half an hour
 - £55 in forty minutes.
- How many weeks are there in :-
 - fifty six days
 - thirty five days
 - 364 days ?

TeeJay Publishers Mental Mathematics Support Sheets



TeeJay Book 1b

Support Sheet for Test 15.




- How many centimetres are there in :-
 - four metres
 - six metres
 - ten metres ?
- Six identical bags weigh one hundred and eighty kg. How much would one bag weigh ?
 - Eight identical boxes weigh 128 kg. How much would one box weigh ?
 - How much would one crate weigh if seven weigh one hundred and forty seven kg ?
- Find $95 - 27$.
 - Subtract 19 from 72.
 - Take 23 from 81.
- How much change will I get from a £5 note if I spend :-
 - £3.40 and 70p
 - £1.65 and £1.50
 - £2.60 and 90p ?
- Write the fraction of each shape that is shaded :-
 - 
 - 
 - 
- Find seven \times seven, + 7.
 - What is six \times six, + 6 ?
 - Find nine \times nine, + nine.
- It is 28th April. Dee has a birthday in four days. What date is her birthday ?
 - It is 29th October. Sam has a birthday in three days. What date is his birthday ?
 - It is the 25th March. What date is Paul's birthday if it is in eleven days ?
- What measurement would you use (*mm, cm, m, km*) to measure the :-
 - length of a car
 - length of a country
 - width of a needle ?
- A box holds twelve cakes. How many cakes will be in five boxes ?
 - A crate holds 12 bottles. How many bottles are there in seven crates ?
 - A transporter has four cars. How many cars are there in nine transporters ?
- What fraction is indicated by each arrow ?
 - 
 - 
 - 

TeeJay Publishers Mental Mathematics Support Sheets




TeeJay Book 1b

Support Sheet for Test 16.



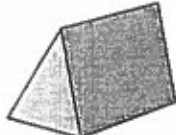
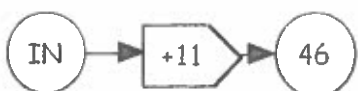

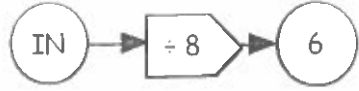
- There are 145 boys and 125 girls in a school. How many pupils is that in total?
 - There are 215 men and 155 women at a disco. How many people are at the disco?
 - There are 325 cows and 265 sheep on a farm. How many animals are on the farm?
- How long is it in hours and minutes between :-
 - 7 am and 10:30 am
 - 4:20 pm and 8:30 pm
 - 11:15 am and 2:35 pm?
- Write each of these dates fully in words :-
 - 30/07/18
 - 01/02/03
 - 20/10/20.
- Find :-
 - a seventh of 420
 - a fifth of 850
 - a seventh of 7700.
- What is the total amount each time here :-
 - four £5 notes, two £2 coins, three 50p coins, two 10p coins and one 5p coin
 - two £10 notes, six £2 coins, four £1 coins, three 20p's, a 10p, a 5p, a 2p and a 1p coin
 - eight £2 coins, six 50p coins, five 20p coins, ten 10p coins and a 2p coin?
- Find 5×5 , $- 5$.
 - What is 4×4 , $- 4$?
 - Find 8 times 8, $- 8$.
- What fraction of each shape is **not** shaded?
 - 
 - 
 - 
- How many weeks are there in :-
 - seventy seven days
 - forty two days
 - 140 days?
- Find $3 \times 4 \times 5$.
 - Multiply 4, 5 and 6.
 - What is $3 \times 2 \times 7$?
- What is the missing number in each of these patterns :-
 - 440, 410,, 350,
 - 170, 280, 390, ...
 - 330, 290, 250,?

TeeJay Publishers Mental Mathematics Support Sheets



TeeJay Book 1b

Support Sheet
for Test 17.

- Find :-
 - $160 - 25 + 7$
 - $180 - 45 + 10$
 - $280 - 65 + 16$.
- How much will I have left from a £10 note if I spend :-
 - £3.50 and £4.20
 - £7.80 and 90p
 - £5.60 and £4.35 ?
- Write each of these times in 24 hour format :-
 - ten to ten (*bedtime*)
 - quarter to 8 (*breakfast*)
 - twenty past 6 (*dinner*).
- What is the missing mathematical symbol in each of these. Choose from +, -, x or ÷ :-
 - $7 \dots 7 = 0$
 - $11 \dots 11 = 121$
 - $9 \dots 9 = 1?$
- Find eight times four and then half your answer.
 - What is seven multiplied by eight then half of your answer ?
 - Find half of eight times five.
- Name each of these 3-D shapes :-
 - 
 - 
 - 
- Divide seven into 714.
 - Find $824 \div 8$.
 - Divide six into 612.
- Add the number of faces on a cube to the number of edges on a cube.
 - Multiply the number of faces on a cylinder by the number of days in a week.
 - Multiply the number of corners on a cube by the number of edges on a cylinder.
- Find :-
 - double double five
 - double double 15
 - double seven doubled.
- What number must have gone IN to each of these number machines ?
 - 
 - 
 - 

TeeJay Publishers Mental Mathematics Support Sheets



TeeJay Book 1b

Support Sheet
for Test 18.

- How long is it from ten to four till half past four ?
 - How long is it from quarter past six to five to seven ?
 - How long is it from ten past eight till five past nine ?
- Find $56 + 8$, then $\div 4$.
 - What is $5 + 40$, then $\div 9$?
 - Find $76 + 12$, then $\div 4$.
- There is one coin missing in each of these. Find the missing coin :-

 - I have £2.40. - I have two £1 coins, a 20p coin and three 5p coins.
 - I have £3.12. - I have a £2 coin, two 50p coins and two 5p coins.
 - I have £6.66. - I have a £5 note a £1 coin, a 50p coin, a 10p coin and a 5p coin.
- What fraction is each arrow pointing to ?

 -
 -
 -
- How many faces are there on a :-

 - cuboid
 - cylinder
 - square based pyramid ?
- Write the missing number in each of these :-

 - - 12 = 11
 - - 15 = 10
 - - 9 = 40.
- Find $3 \times 4 \times 5 \times 10$.
 - Multiply 2, 3, 4, and 10.
 - Find $2 \times 4 \times 7 \times 10$.
- What will the remainder be in each of these calculations :-

 - sixty eight divided by 5
 - six into fifty three
 - twenty nine \div nine ?
- Find :-

 - $200 - 50 - 40 - 30$
 - $100 - 55 - 15 - 25$
 - two hundred and fifty take away seventy, subtract sixty, then take off fifty.
- How many days, including the last date, are there from :-

 - 25th Sept to 4th Oct.
 - 29th May to 11th June
 - 28th July to 1st Sept ?

TeeJay Publishers Mental Mathematics Support Sheets



TeeJay Book 1b

Support Sheet for Test 19.

- How many millilitres are there in :-
 - one litre
 - a quarter of a litre
 - 3 litres ?
- How much change from a £20 note will I get if I spend :-
 - £12.75 and £3.15
 - £10.50 and £8.45
 - £9.75 and £8.50 ?
- Write the next number in each of these patterns :-
 - 80, 75, 69, 62, ...
 - 110, 135, 160, 185, ...
 - nineteen, twenty, twenty two, twenty five, twenty nine,
- Find :-
 - eight sevens
 - seven sixes
 - nine twelves.
- Round each of these to the nearest ten :-
 - seven hundred and sixty four
 - two hundred and eighty five
 - nine hundred and ninety seven.
- Find $49 \div 8$.
 - Find $66 \div 7$.
 - Divide 90 by 4.
- What number does each set of tally marks represent ?
 -
 -
 -
- Find a half of ninety subtract double fifteen.
 - What is half of seventy subtract a third of thirty ?
 - Find a half of sixty take away double thirteen.
- Add the number of days in January to the number of months in a year.
 - Add the number of days in May to the number of weeks in thirty five days.
 - Add the number of days in October to the number of days in three weeks.
- Write each of these dates this year using six digits :-
 - Guy Fawkes night
 - Halloween
 - your birthday.

TeeJay Publishers Mental Mathematics Support Sheets




TeeJay Book 1b

Support Sheet for Test 20.

- Find :-
 - $64 \div 4 \div 4 \div 2$
 - $200 \div 5 \div 4 \div 2$
 - $120 \div 6 \div 5 \div 2$.
- How many grams are there in :-
 - four kilograms
 - one and a half kg
 - six and a half kg ?
- Find :-
 - a seventh of £140
 - a ninth of four hundred and fifty
 - a fifth of five hundred and fifty five.
- Multiply the number of faces of a cylinder by the number of corners on a cube.
 - Find the number of corners on a triangular prism times the number of days in April.
 - Multiply the number of edges of a cube by the number of faces in a cuboid.
- What will be the remainder for each of these calculations :-
 - sixty divided by nine
 - thirty six \div seven
 - fifty three \div ten ?
- Write each of these in 12 hour and in 24 hour clock times :-
 - ten to eight (breakfast)
 - lunch at one forty
 - quarter to 9 (bedtime).
- Divide five into 450.
 - Find three hundred and sixty divided by six.
 - Find seven hundred and twenty divided by nine.
- Write the missing symbol in each of these :- (Choose from +, -, \times and \div).
 - $8 \dots 8 = 0$
 - $12 \dots 12 = 1$
 - $17 \dots 17 = 34$.
- Dave saved £164. He needs £200. How much more does he need to save ?
 - Bunny needs £400. She has saved £275. How much more does she need ?
 - Jia has £465. He needs £600. How much does he still need to save ?
- Find $7 \times 12 + 20$.
 - Find nine times eleven, subtract nineteen.
 - Find six multiplied by nine, add forty.

TeeJay Publishers Mental Mathematics Assessments



TeeJay Book 1b

Test No. 1
Chapters 1-2 + Bk 1a

Class


No.

Teacher

Date


Read each question twice -

Leave a couple of seconds between each reading
and approx 10 seconds between questions.

No.	Question	Answer	No. with wrong answer
1.	 Write this 4 digit number in words. 3407.	three thousand four hundred & seven	
2.	What is sixty take away fifteen ?	45	
3.	I have six £1 coins, eight 10 pence coins and four 1 pence coins. Write how much I have, using the decimal point.	£6.84	
4.	Write "nine thousand and eleven" using digits (numbers).	9011	
5.	Round 46 to the nearest ten.	50	
6.	I have 12 pence in my pocket and spend a third of it. How much do I have left ?	8p	
7.	What is two times twelve ?	24	
8.	What is seventy eight add six ?	84	
9.	I get £1.80 change from a £10 note. How much did I spend ?	£8.20	
10.	What is twenty four divided by three ?	8	

Class Average

TeeJay Publishers Mental Mathematics Assessments



TeeJay Book 1b

Test No. 2
Chapters 1-2 + Bk 1a

Class


No.

Teacher

Date

Read each question twice -

Leave a couple of seconds between each reading
and approx 10 seconds between questions.

No.	Question	Answer	No. with wrong answer
1.	Write "six thousand and ninety" using digits (numbers).	6090	
2.	Round 529 to the nearest ten.	530	
3.	What is three times nine ?	27	
4.	 Write this 4 digit number in words :- 5064.	five thousand and sixty four	
5.	What is two hundred take away twenty five ?	175	
6.	What is a half of thirty pence ?	15p	
7.	I have nine £1 coins and seven 1 pence coins. Write how much I have, using the decimal point.	£9.07	
8.	If I divide seventeen by three, what remainder will I get ?	2	
9.	What is twenty nine add eleven ?	40	
10.	How many ten pence coins can I get for £4.60 ?	46	

Class Average

TeeJay Publishers Mental Mathematics Assessments



TeeJay Book 1b

Test No. 3
Chapters 1-4 + Bk 1a

Class No. Teacher Date

Read each question twice -

Leave a couple of seconds between each reading
and approx 10 seconds between questions.

No.	Question	Answer	No. with wrong answer
1.	Write the time 1045 another way .	quarter to eleven	
2.	What month is two months before July ?	May	
3.	What is 9 multiplied by 5 ?	45	
4.	Write 10.30 pm in 24 hour clock time.	2230	
5.	I double a number and get twenty six. What is the number ?	13	
6.	How long is it from 4:30 pm to 9:30 pm ?	5 hrs	
7.	What is 18 divided by 3 ?	6	
8.	Write the time 1515 in 12 hour time. Remember to use am or pm.	3.15 pm	
9.	What is four times seven ?	28	
10.	Take 7 away from 30.	23	

Class Average

TeeJay Publishers Mental Mathematics Assessments



TeeJay Book 1b

Test No. 4
Chapters 1-4 + Bk 1a

Class

No.

Teacher

Date

Read each question twice -

Leave a couple of seconds between each reading
and approx 10 seconds between questions.

No.	Question	Answer	No. with wrong answer
1.	Write 2.50 am in 24 hour time.	0250	
2.	What is 32 take away 9 ?	23	
3.	What is 32 divided by 2 ?	16	
4.	What is double 15 ?	30	
5.	I received £2.30 change from a £10 note. How much did I spend ?	£7.70	
6.	<div style="display: inline-block; border: 1px solid black; padding: 2px; margin-right: 10px;">board</div> Write this 4 digit number in words :- 8019.	eight thousand and nineteen	
7.	Round 436 to the nearest 10.	440	
8.	What number do you get when you add 77 and 9 ?	86	
9.	What is the month that comes just before January ?	December	
10.	Write the time 6.40 another way.	20 to 7	

TeeJay Publishers Mental Mathematics Assessments



TeeJay Book 1b

Test No. 5
Chapters 1-6 + Bk 1a

Class

No.

Teacher

Date

Read each question twice -

Leave a couple of seconds between each reading
and approx 10 seconds between questions.

No.	Question	Answer	No. with wrong answer
1.	What is 45 divided by 5 ?	9	
2.	I am facing North and make a 90 degree turn anticlockwise. In which direction am I now facing ?	West	
3.	How long is it from noon till half past two ?	$2\frac{1}{2}$ hrs	
4.	I have twenty three 10 pence coins and one 5 pence coin. Write how much I have, using the decimal point.	£2.35	
5.	I spent half of my £30 birthday money. How much have I left ?	£15	
6.	If I divide 23 by 4, what remainder will I get ?	3	
7.	What do I get when I add 7 to 35 ?	42	
8.	Write the number "five thousand two hundred and four" using digits.	5204	
9.	What is 8 multiplied by 3 ?	24	
10.	Round the number 896 to the nearest 10.	900	

Class Average

TeeJay Publishers Mental Mathematics Assessments



TeeJay Book 1b

Test No. 6
Chapters 1-6 + Bk 1a

Class

No.

Teacher

Date


Read each question twice -

Leave a couple of seconds between each reading
and approx 10 seconds between questions.

No.	Question	Answer	No. with wrong answer
1.	Subtract 7 from 83.	76	
2.	Find 4 times twelve.	48	
3.	I received two pounds eighty five change from a five pound note. How much must I have spent ?	£2.15	
4.	What is two hundred and thirty divided by ten ?	23	
5.	Write 25 to 11 at night in 24 hour time form.	2235	
6.	Which month comes two months before September ?	July	
7.	What remainder do you get when you divide 38 by 5 ?	3	
8.	I am facing West and turn 90 degrees clockwise. In which direction am I facing ?	North	
9.	What is 139 plus 12 ?	151	
10.	How long is it from quarter past 10 in the morning till noon ?	1 hr 45 mins	

Class Average

TeeJay Publishers Mental Mathematics Assessments



TeeJay Book 1b

Test No. 7
Chapters 1-8 + Bk 1a

Class

No.

Teacher

Date


Read each question twice -

Leave a couple of seconds between each reading
and approx 10 seconds between questions.

No.	Question	Answer	No. with wrong answer
1.	What are five nines ?	45	
2.	How many 20p pieces can I get for £5 ?	25	
3.	How many days altogether are there in March and April ?	61	
4.	Write the date 9th August 2015 in 6 digit format.	09/08/15	
5.	Four lollies cost 60 pence. What is the cost of 1 lolly ?	15p	
6.	John is half his dad's age. If John is 24, how old is his dad ?	48	
7.	Add 1 pound 25 pence and 3 pounds 45 pence and write the answer using a decimal point.	£4.70	
8.	597 people attend a football match. Round this to the nearest 10.	600	
9.	If I take 8 away from a number, the answer is 23. What is the number ?	31	
10.	Write "four thousand and thirty" using digits.	4030	

Class Average

TeeJay Publishers Mental Mathematics Assessments



TeeJay Book 1b

Test No. 8
Chapters 1-8 + Bk 1a

Class




No.

Teacher

Date

Read each question twice -

Leave a couple of seconds between each reading
and approx 10 seconds between questions.

No.	Question	Answer	No. with wrong answer
1.	 Write this number in words :- 5040,	five thousand and forty	
2.	Jemma had eighteen bangles. She gave Mandy half of them. How many bangles did Mandy have left ?	9	
3.	What is 125 plus 55 ?	180	
4.	Write the answer to 5 divided into 45.	9	
5.	How many hours is it from 11.30 am to 2.30 pm ?	3 hrs	
6.	 What is $3 \overline{)126}$?	42	
7.	I have three £1 coins, two 50 pences, one 20 pence and a 5 pence. How much have I altogether ? Use the decimal point.	£4.25	
8.	I spent £4.85 on a book and 75p on a pen. How much did I spend altogether ?	£5.60	
9.	What season comes just before Autumn ?	Summer	
10.	 Write this date fully in words :- 20/05/04.	twentieth May two thousand and four	

Class Average

TeeJay Publishers Mental Mathematics Assessments



TeeJay Book 1b

Test No. 9
Chapters 1-10 + Bk 1a

Class





No.

Teacher

Date


Read each question twice -

Leave a couple of seconds between each reading
and approx 10 seconds between questions.

No.	Question	Answer	No. with wrong answer
1.	What is 7 times nine ?	63	
2.	<div style="display: flex; align-items: center;"> <div style="border: 1px solid black; padding: 2px; margin-right: 5px;">board</div> <div style="margin-right: 10px;">How many of these would make good tiles ?</div> <div style="display: flex; gap: 10px;">     </div> </div>	3	
3.	What remainder do you get when you divide 39 by 5 ?	4	
4.	Write the time 0035 in 12 hour format, using am or pm.	12.35 am	
5.	Subtract 45 from 280.	235	
6.	I won £647 in the lottery. Round this to the nearest £10.	£650	
7.	What is £4.60, take away £1.15 ?	£3.45	
8.	How many days are there in July and August put together ?	62	
9.	A CD costs £8. How much will it cost to buy 6 of them ?	£48	
10.	What is 80 divided by 2, then divided by 4, then divided by 5 ?	2	

Class Average

TeeJay Publishers Mental Mathematics Assessments



TeeJay Book 1b

Test No. 10
Chapters 1-10 + Bk 1a

Class


No.

Teacher

Date


Read each question twice -

Leave a couple of seconds between each reading
and approx 10 seconds between questions.

No.	Question	Answer	No. with wrong answer
1.	Find $10 + 9 + 8 + 7 + 6$ (read slowly).	40	
2.	If I double the number 12, add on 6 then halve the answer, what do I get? (read slowly).	15	
3.	It costs me £8 to hire a cement mixer for a day. How much will it cost me to hire it for a whole week, Monday to Sunday?	£56	
4.	I set off from Glasgow to John O'Groats by train at 7.05 am. If the journey takes 8 hours, at what time will I arrive in John O'Groats?	3.05 pm	
5.	There were 52 people in a room, then 9 people left. How many people were then in the room?	43	
6.	It is "four thousand, five hundred and eight" miles from London to Dubai. Write this number using digits.	4508	
7.	James and his 4 friends share a bag of 49 marbles. If they each receive the same number, how many marbles will be left over?	4	
8.	How much change from a £5 note will I receive if I buy two comics at 60 pence each?	£3.80	
9.	<div style="display: flex; align-items: center;"> <div style="border: 1px solid black; padding: 2px; margin-right: 10px;">board</div> <div>Write this date in words :- 04/08/07.</div> </div> 	Fourth August, two thousand and seven	
10.	A box contains 6 eggs. How many eggs are there in 9 boxes?	54	

Class Average

TeeJay Publishers Mental Mathematics Assessments



TeeJay Book 1b

Test No. 11
Chapters 1-12 + Bk 1a

Class

No.

Teacher

Date

Read each question twice -

Leave a couple of seconds between each reading
and approx 10 seconds between questions.

No.	Question	Answer	No. with wrong answer
1.	23 of the 120 passengers on a train got off at a station. How many were left on board the train ?	97	
2.	There are 677 workers in a factory. Round this to the nearest 10.	680	
3.	I'm meeting my friend at five to four this afternoon. Write this time in 12 hour format.	3.55 pm	
4.	A box contains 8 chocolates. How many are there in 9 boxes ?	72	
5.	In my pocket, I have two £5 notes, three £2 coins, a fifty pence coin and two 20 pence coins. How much do I have altogether ?	£16.90	
6.	What is the third last month of the year ?	October	
7.	What is $9 + 77$?	86	
8.	36 daffodil bulbs are planted equally into 4 pots. How many bulbs will there be in each pot ?	9	
9.	Jane has one pound and sixty pence. Nick has eighty pence. How much do they have altogether ?	£2.40	
10.	A box holds 9 golf balls. How many golf balls will there be in 9 boxes ?	81	

Class Average

TeeJay Publishers Mental Mathematics Assessments



TeeJay Book 1b

Test No. 12
Chapters 1-12 + Bk 1a

Class

No.

Teacher

Date

Read each question twice -

Leave a couple of seconds between each reading
and approx 10 seconds between questions.

No.	Question	Answer	No. with wrong answer
1.	What is 8 times 8 ?	64	
2.	I'm meeting my mum after school at ten to four. Write this in 24 hour format.	1550	
3.	What is a third of 270 ?	90	
4.	When I divide a number by two, the answer is 7 remainder 1. What is the number ?	15	
5.	Write down the answer to 11 multiplied by 9.	99	
6.	A plane was flying West and the pilot made a quarter turn clockwise. The pilot then made a half turn anticlockwise. In which direction was the plane then heading ?	South	
7.	How many days are there in May, June and July altogether ?	92	
8.	Julie has £2.95 and her friend Lucy has £1.20. How much more has Julie than Lucy ?	£1.75	
9.	Divide 100 by 5, then divide your answer by 2.	10	
10.	What do I get if I multiply 8 by 7, then add on 4 ?	60	

Class Average

TeeJay Publishers Mental Mathematics Assessments



TeeJay Book 1b

Test No. 13
Chapters 1-14 + Bk 1a

Class


No.

Teacher

Date

Read each question twice -

Leave a couple of seconds between each reading
and approx 10 seconds between questions.

No.	Question	Answer	No. with wrong answer
1.	What is 100 subtract 19 ?	81	
2.	If I halve a number then take away 1 from the answer, I get 12. What is the number ?	26	
3.	How much change will I get from a £10 note if I buy a top at £6.99 ?	£3.01	
4.	Share £72 among 8 people equally. How much will each person get ?	£9	
5.	 What is the missing number in this pattern :- 37, 45, 53, ..., 69, 77 ?	61	
6.	Write the date "twenty fifth of February two thousand and twenty" in number form, using 6 digits .	25/02/20	
7.	Find :- 360 add 450.	810	
8.	What is $8 \times 9 \times 10$?	720	
9.	How many minutes is it from 5 to 6 until quarter past 6 ?	20	
10.	Divide 81 by 9, then add on 11 to your answer.	20	

Class Average

TeeJay Publishers Mental Mathematics Assessments



TeeJay Book 1b

Test No. 14
Chapters 1-14 + Bk 1a

Class


No.

Teacher

Date

Read each question twice -

Leave a couple of seconds between each reading
and approx 10 seconds between questions.

No.	Question	Answer	No. with wrong answer
1.	Round the number "two hundred and seventeen" to the nearest 10.	220	
2.	Express the time 0050 in 12 hour time, using am or pm.	12:50 am	
3.	If I divide the number 50 by 6, what remainder will I get ?	2	
4.	I've got £3.45 in one pocket and £1.06 in the other. How much have I altogether ?	£4.51	
5.	 What is the next number in this pattern :- 95, 89, 83, 77, 71, ?	65	
6.	Mr Jones weighs 72 kilograms and Mrs Jones weighs 57 kilograms. How much heavier is Mr Jones than Mrs Jones ?	15 kg	
7.	What is $270 \div 9 \div 3$?	10	
8.	What is 8 times 6, add on 12 ?	60	
9.	Tickets for a show were £5 each. After twenty minutes, a total of £40 was taken in sales. How many tickets must have been sold ?	8	
10.	How many weeks are there in 63 days ?	9	

TeeJay Publishers Mental Mathematics Assessments



TeeJay Book 1b

Test No. 15
Chapters 1-16 + Bk 1a

Class



No.

Teacher

Date


Read each question twice -

Leave a couple of seconds between each reading
and approx 10 seconds between questions.

No.	Question	Answer	No. with wrong answer
1.	How many centimetres are there in 3 metres ?	300	
2.	Six identical bags of sweets weigh 132 grams. How much will one bag weigh ?	22 g	
3.	Subtract 18 from 92.	74	
4.	I bought a book for £2.50 and a pen for 80p. How much change will I get from a £5 note ?	£1.70	
5.	<div style="display: flex; align-items: center;"> <div style="border: 1px solid black; padding: 2px; margin-right: 10px;">board</div> <div style="margin-right: 10px;">What fraction of this shape has been shaded ?</div>  </div>	$\frac{3}{5}$	
6.	Multiply 8 by 8, then add on 8.	72	
7.	It is June the 28th. My birthday is in 5 days time. What is the date of my birthday ?	July 3rd	
8.	Which of these units would you use to measure the height of a door :- millimetres, centimetres, metres or kilometres ?	metres	
9.	A box holds 12 cupcakes. How many cupcakes are there in 6 boxes ?	72	
10.	<div style="display: flex; align-items: center;"> <div style="border: 1px solid black; padding: 2px; margin-right: 10px;">board</div> <div style="margin-right: 10px;">What fraction is shown here by the arrow ?</div>  </div>	$2\frac{5}{6}$	

Class Average

TeeJay Publishers Mental Mathematics Assessments





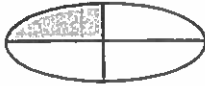

TeeJay Book 1b

Test No. 16
Chapters 1-16 + Bk 1a

Class No. Teacher Date

Read each question twice -

Leave a couple of seconds between each reading
and approx 10 seconds between questions.

No.	Question	Answer	No. with wrong answer
1.	There are 125 boys and 135 girls in a school. How many pupils are there in the school ?	260	
2.	I start school at 9 am. Lunch is at 12.30 pm. How long is it from start of school till lunchtime ?	3 hr 30 mins or $3\frac{1}{2}$ hrs	
3.	 This was the date of my last birthday - 29/02/16 Write this date out fully in words.	29th of Feb two thousand and sixteen	
4.	Find :- one seventh of £630.	£90	
5.	In my mum's purse, there are three £5 notes, a £2 coin, a £1 coin, two 20p coins and a 5p coin. How much does my mum have in total ?	£18.45	
6.	Multiply 6 by 6, then subtract 6 from your answer.	30	
7.	 What fraction of this shape is not shaded ? 	$\frac{3}{4}$	
8.	How many weeks are there in 56 days ?	8	
9.	What is $2 \times 4 \times 9$?	72	
10.	 What number is missing from this pattern :- 250, 220, 190, 160, 130,, 70 ?	100	

Class Average

TeeJay Publishers Mental Mathematics Assessments








TeeJay Book 1b

Test No. 17
Chapters 1-18 + Bk 1a

Class No. Teacher Date

Read each question twice -

Leave a couple of seconds between each reading and approx 10 seconds between questions.

No.	Question	Answer	No. with wrong answer
1.	Subtract 25 from 140 then add on 13.	128	
2.	From the £10 of change I have in my pocket, I gave James £4.50 and Sean £2.40. How much do I have left in my pocket ?	£3.10	
3.	Last night, I went to bed at ten to nine. Write this in 24 hour time format.	2050	
4.	 What symbol is missing here ? $8 \dots 8 = 1$ Choose from +, -, x or ÷.	÷	
5.	Multiply 6 by 9 and halve your answer.	27	
6.	 Name this 3-D shape :- 	Triangular Prism	
7.	What is 9 into 945 ?	105	
8.	Multiply the number of corners on a cube by the number of faces on a square based pyramid.	40	
9.	What do I get if I double double 12 ?	48	
10.	 What number must have gone IN to this number machine ? 	56	

Class Average

TeeJay Publishers Mental Mathematics Assessments



TeeJay Book 1b

Test No. 18
Chapters 1-18 + Bk 1a

Class



No.

Teacher

Date


Read each question twice -

Leave a couple of seconds between each reading
and approx 10 seconds between questions.

No.	Question	Answer	No. with wrong answer
1.	How long is it from quarter to 7 till twenty past 7 ?	35 mins	
2.	Add 9 to 57 and divide your answer by 6.	11	
3.	I have £2.67. This is made up of two £1 coins, one 50p coin, three 5p coins and one other coin. What is the last coin ?	2p	
4.	<div style="display: flex; align-items: center;"> <div style="border: 1px solid black; padding: 2px; margin-right: 5px;">board</div> <div style="margin-right: 10px;">To what fraction is the arrow pointing ?</div>  </div>	$9\frac{3}{5}$	
5.	How many faces has a triangular prism ?	5	
6.	<div style="display: flex; align-items: center;"> <div style="border: 1px solid black; padding: 2px; margin-right: 5px;">board</div> <div style="margin-right: 10px;">What number does the circle stand for here ?</div>  </div>	22	
7.	What is $2 \times 4 \times 6 \times 10$? (read slowly).	480	
8.	When 58 is divided by 5, what will the remainder be ?	3	
9.	What is :- 100 take away 50, take away 25, take away 5 ?	20	
10.	It is September 28th. I go on my holidays on October 7th. How many days till I go on holiday ?	9 days	

Class Average

TeeJay Publishers Mental Mathematics Assessments



TeeJay Book 1b

Test No. 19
All of CfE Level 1

Class




No.

Teacher

Date

Read each question twice -

Leave a couple of seconds between each reading
and approx 10 seconds between questions.

No.	Question	Answer	No. with wrong answer
1.	How many millilitres are there in half a litre ?	500 ml	
2.	How much change from a £20 note will I get if I buy a shirt for £11.50 and a tie for £6.40 ?	£2.10	
3.	 What is the next number in this pattern of numbers ? 90, 80, 71, 63, 56,	50	
4.	Find nine eights.	72	
5.	An orchard has 1309 trees. Round this to the nearest 10.	1310	
6.	Give the answer to :- $38 \div 7$.	5 r 3	
7.	 What number does this set of tally marks represent ? HHH HHH HHH HHH HHH III	28	
8.	What answer do we get if we take half of 90 away from double 25 ?	5	
9.	Add the number of days in a week to the number of months in a year to the number of days in June.	49	
10.	 What was special about this date :- 25/12/15 ?	Christmas Day	

Class Average

TeeJay Publishers Mental Mathematics Assessments



TeeJay Book 1b

Test No. 20
 All of CFE Level 1

Class

No.

Teacher


Date

Read each question twice -

 Leave a couple of seconds between each reading
 and approx 10 seconds between questions.

No.	Question	Answer	No. with wrong answer
1.	Find :- $48 \div 6 \div 4 \div 2$.	1	
2.	How many grams are there in three and a half kilograms ?	3500	
3.	Find :- a sixth of £120.	£20	
4.	Multiply the number of faces on a cuboid by the number of corners on a cube.	48	
5.	What remainder do you get when you divide 50 by 6 ?	2	
6.	It is ten to eleven at night. Write this in both 12 hour format using am or pm as well as in 24 hour form.	10.50 pm 2250	
7.	What is 5 divided into 350 ?	70	
8.	<div style="display: flex; align-items: center;"> <div style="border: 1px solid black; padding: 2px; margin-right: 10px;">board</div> <div> What symbol is missing here ? <div style="margin-left: 20px;"> $24 \dots 24 = 0$ Choose from +, -, x or ÷. </div> </div> </div>	-	
9.	I have saved £143. How much more do I need to reach £200 ?	£57	
10.	What is 8×11 , add 10 ?	98	

TeeJay Publishers Mental Mathematics Assessments



TeeJay Book 1b

Test No.

Class No. Teacher Date

Read each question twice -

Leave a couple of seconds between each reading
and approx 10 seconds between questions.

No.	Question	Answer	No. with wrong answer
1.			
2.			
3.			
4.			
5.			
6.			
7.			
8.			
9.			
10.			